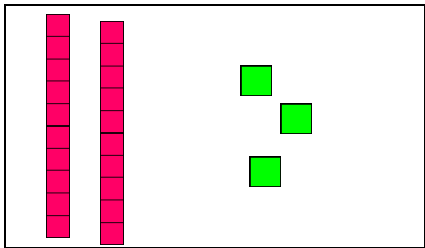
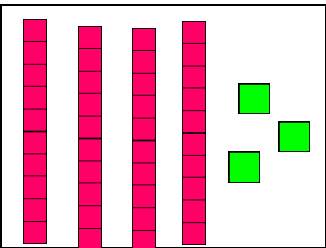
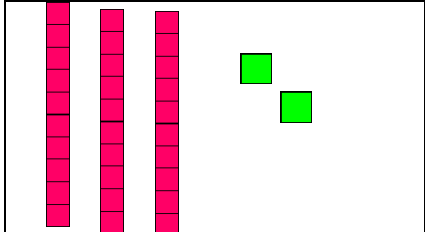
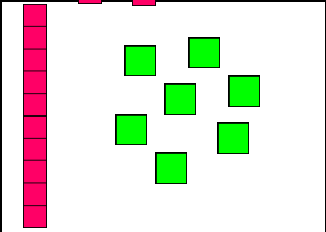
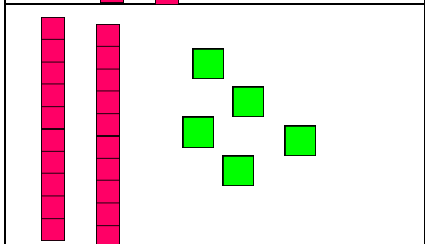
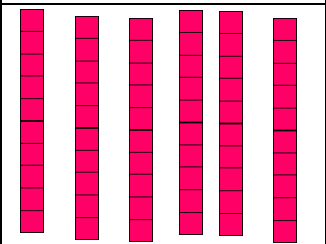




Tens and Ones to 50

1. Counting in 10's and 1's, write down the value of each box.


2. Draw the amount of 10's and 1's you need for each number.

	25		50
	42		15
	37		8

Tens and ones

1 Complete the stem sentences and complete any missing picture representations.

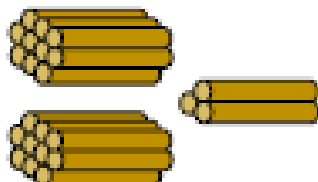
a



There is _____ ten and _____ ones.

_____ ten + _____ ones = _____.

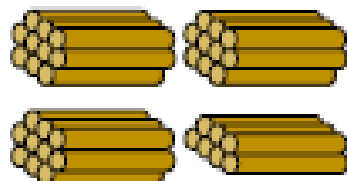
b



There are _____ tens and _____ ones.

_____ tens + _____ ones = _____.


c



There are _____ tens and _____ ones.

_____ tens + _____ ones = _____.

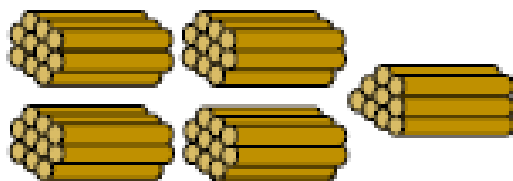
d



There are _____ tens and _____ ones.

_____ tens + _____ ones = _____.

e



There are _____ tens and _____ ones.

_____ tens + _____ ones = _____.

f



There are 2 tens and 7 ones.

2 tens + 7 ones = _____.

g



There are 3 tens and 2 ones.

3 tens + 2 ones = _____.